

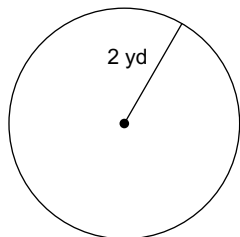
# HOMEWORK: Area and Sector Area

**Find the area of each.**

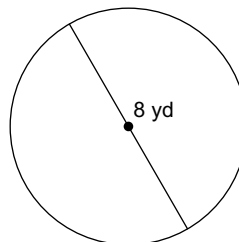
**(a) Leave in terms of pi.**

**(b) Round to nearest tenth.**

1)



2)

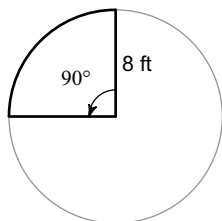


**Find the area of each sector.**

**(a) Leave in terms of pi.**

**(b) Round to nearest tenth.**

3)



4)

