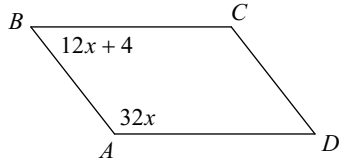


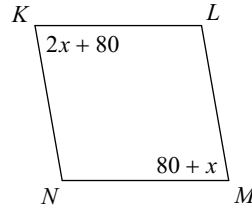
Parallelograms: Opposite and Consecutive Angles

Find the measurement indicated in each parallelogram.

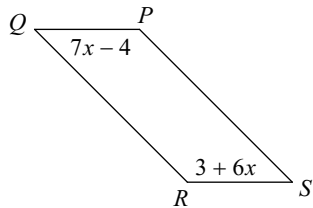
1) Find $m\angle D$



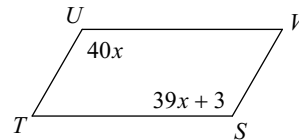
2) Find $m\angle N$



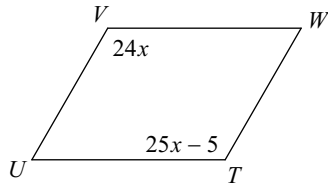
3) Find $m\angle Q$



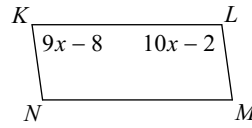
4) Find $m\angle S$



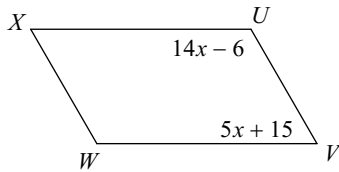
5) Find $m\angle U$



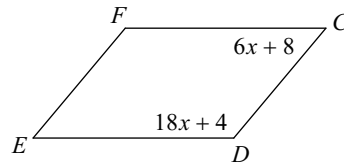
6) Find $m\angle K$



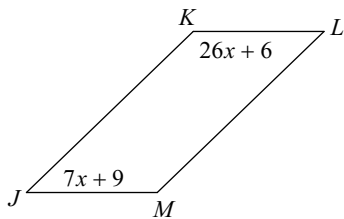
7) Find $m\angle V$



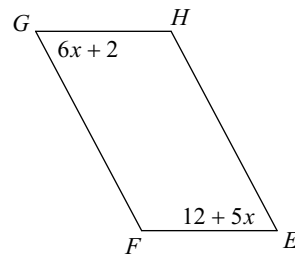
8) Find $m\angle F$



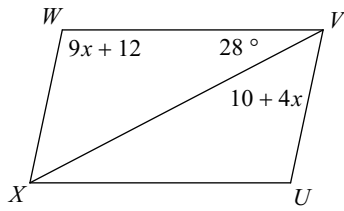
9) Find $m\angle L$



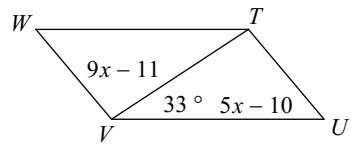
10) Find $m\angle E$



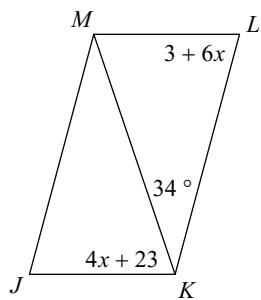
11) Find $m\angle W$



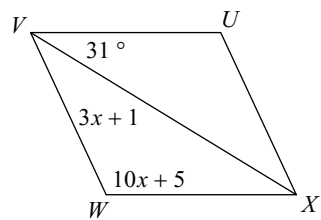
12) Find $m\angle UTW$



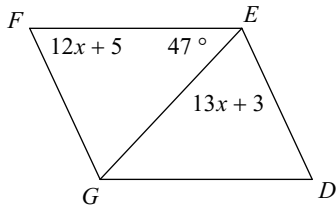
13) Find $m\angle LKJ$



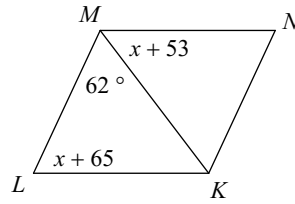
14) Find $m\angle U$



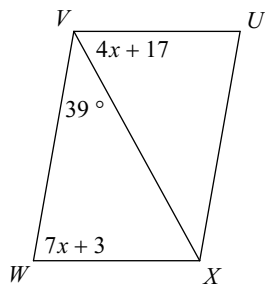
15) Find $m\angle FGD$



16) Find $m\angle LKN$



17) Find $m\angle WVU$



18) Find $m\angle W$

