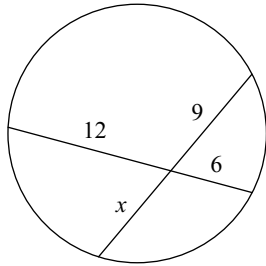


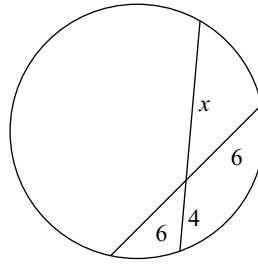
# HOMEWORK: Intersecting Chords

Solve for  $x$ . Assume that lines which appear tangent are tangent.

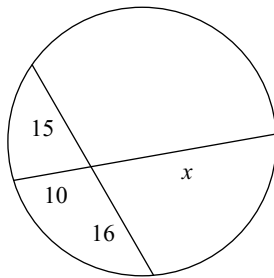
1)



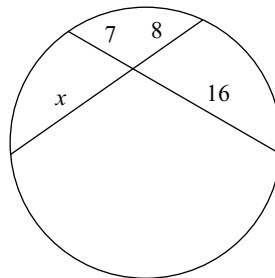
2)



3)

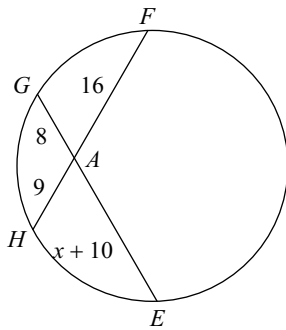


4)

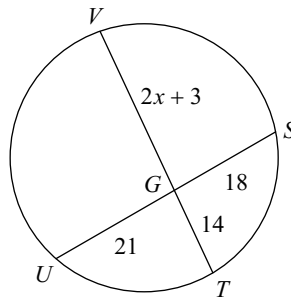


Find the measure of the line segment indicated. Assume that lines which appear tangent are tangent.

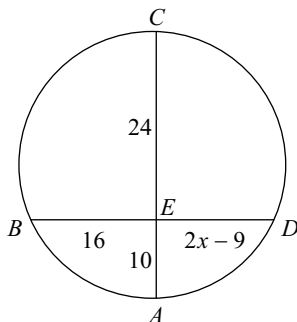
5) Find  $AE$



6) Find  $TV$



7) Find  $ED$



8) Find  $CE$

