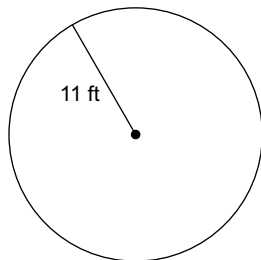


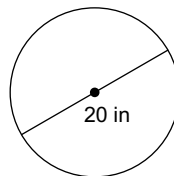
HOMEWORK: Circumference and Arc Length

Find the circumference of each circle. Use your calculator's value of π . Round your answer to the nearest tenth.

1)

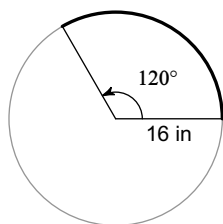


2)

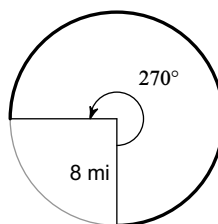


Find the length of each arc. Report your answer in terms of pi and as a decimal approximation to two places.

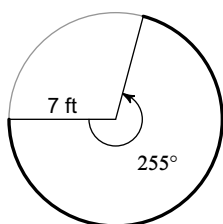
3)



4)



5)



6)

