

# Answers to HOMEWORK: Graphs of Linear Functions

1)  $y = \frac{5}{2}x + 5$

2)  $y = \frac{1}{4}x$

3)  $y = \frac{1}{2}x - 3$

4)  $x = -4$

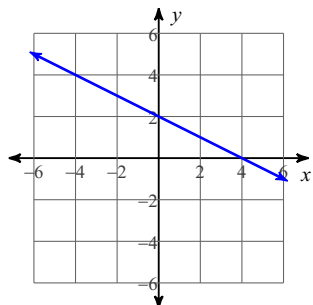
5)  $y = -6x - 4$

6)  $y = 8x + 4$

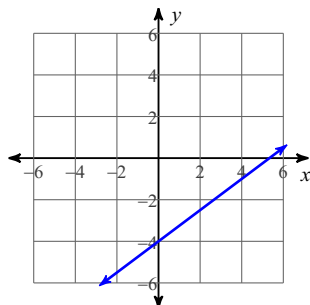
7)  $y = \frac{2}{5}x - 3$

8)  $y = -\frac{1}{2}x - 1$

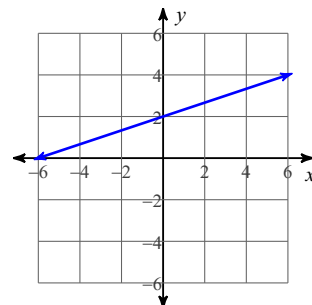
9)



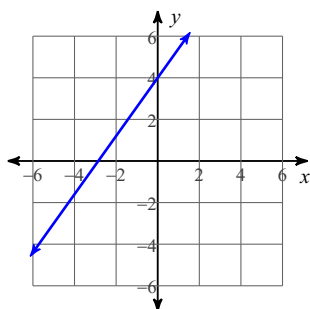
10)



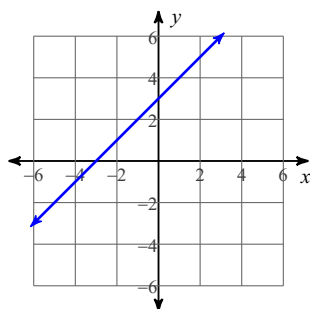
11)



12)



13)



14)

